



THE EDUCATE®  
ELEVATE HUB



WELCOMING OUR

# MATHS QUIZ 2025

PRE-LEVEL



[www.theeducateelevatehub.com](http://www.theeducateelevatehub.com)



+92 300 1556991





1 Let's count: 1, 2, ..., 4, 5. What number is missing?

- |      |          |      |          |
|------|----------|------|----------|
| A. 5 | <b>5</b> | B. 3 | <b>3</b> |
| C. 6 | <b>6</b> | D. 7 | <b>7</b> |





2 Look at these numbers: 8, 6, 10, 7. Which is the smallest?

- |      |          |       |           |
|------|----------|-------|-----------|
| A. 6 | <b>6</b> | B. 7  | <b>7</b>  |
| C. 8 | <b>8</b> | D. 10 | <b>10</b> |

3 What is  $5 - 2$ ?

- |      |          |      |          |
|------|----------|------|----------|
| A. 2 | <b>2</b> | B. 3 | <b>3</b> |
| C. 4 | <b>4</b> | D. 1 | <b>1</b> |

4 Which one is smaller?

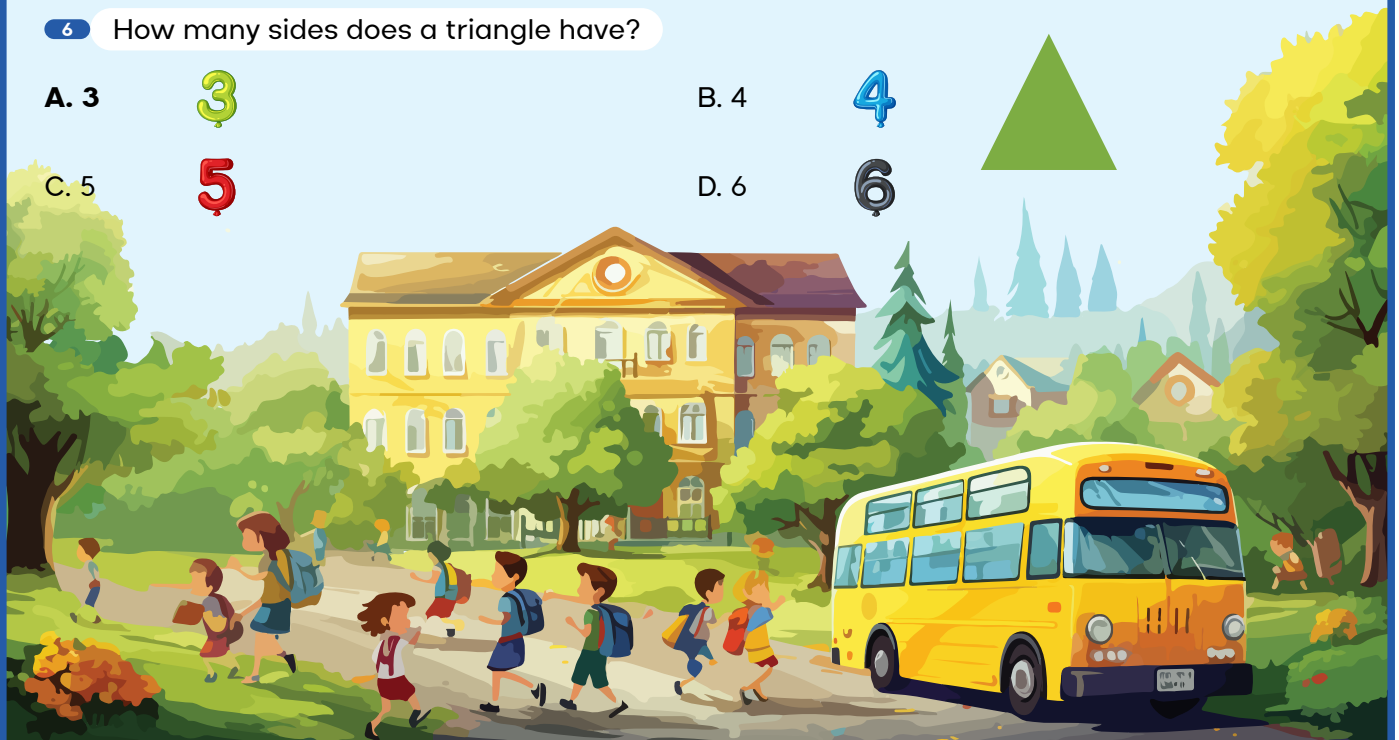
- |        |   |           |  |
|--------|---|-----------|--|
| A. Ant |   | B. Dog    |    |
| C. Cat |  | D. Rabbit |  |

5 A basket has 8 oranges. If you put 2 more in, how many oranges are there now?

- |       |           |      |          |
|-------|-----------|------|----------|
| A. 10 | <b>10</b> | B. 9 | <b>9</b> |
| C. 11 | <b>11</b> | D. 8 | <b>8</b> |


6 How many sides does a triangle have?


- |      |          |      |          |
|------|----------|------|----------|
| A. 3 | <b>3</b> | B. 4 | <b>4</b> |
| C. 5 | <b>5</b> | D. 6 | <b>6</b> |







7 Count the lions. How many?

A. 4 


B. 5 


C. 6 


D. 7 





8 Count the bananas. How many?

A. 6 


B. 8 


C. 7 


D. 9 




9 Count the gifts. How many?

A. 2 

B. 5 

C. 4 

D. 3 



10 What is the shape of a STOP sign?

A. Circle



B. Triangle



C. Octagon



D. Square



11 Which shape looks like a soup can?

A. Sphere



B. Cylinder




C. Cone




D. Cube




12 What number is missing? 1, 3, 5, ..., 9

A. 6 

B. 8 

C. 7 

D. 10 





13 Count the cookies. How many?

- A. 8 
- C. 7 

- B. 12 
- D. 10 



14 Which one is shorter?

A. Spoon



C. Chair



B. Table





D. Bed



15 What number is missing? 2, 4, ..., 8, 10

- A. 5 
- C. 7 

- B. 6 
- D. 9 

16 Count the crayons. How many?

- A. 6 
- C. 5 

- B. 7 
- D. 8 



17 Which container can hold less milk?

A. Cup



C. Bottle



B. Jug



D. Spoon



18 Which one is longer?

A. Pencil



C. Eraser

B. Crayon



D. Paper Clip





19 If you have 4 marbles and you get 2 more, how many do you have?

A. 5

5

B. 6

6

C. 7

7

D. 8

8

20 Point to the shape that has 2 long sides and 2 short sides.

A. Square



B. Triangle



C. Rectangle



D. Circle



21 Count the basketballs. How many?

A. 4

4

B. 3


3

C. 5

5

D. 6

6



22 Which number is greater?

A. 12

12

B. 15

15

C. 13

13

D. 11

11

23 Which shape looks like a box?

A. Cube



B. Sphere



C. Cone



D. Circle



24 Which one is usually shorter?

A. Pencil




B. Tree



C. House





D. Car








25 Count the turtles. How many?

A. 8 


C. 4 


B. 6 


D. 9 




26 What number is between 2 and 4?


A. 1 


C. 3 


B. 4 


D. 5 

27 What number comes after 10?


A. 9 


C. 12 


B. 11 


D. 8 

28 What is 5 plus 2?


A. 6 


C. 7 


B. 8 


D. 9 

29 If you have 2 chocolates and get 3 more, how many do you have now?


A. 4 


C. 5 

B. 6 


D. 7 


30 Which shape looks like a ball?

A. Cube 

C. Cone 

B. Sphere 

D. Cylinder 





31 Point to the shape that has 3 sides.

A. Square



B. Circle



C. Triangle



D. Rectangle



32 What is  $3 + 1$ ?

A. 2

2

B. 3

3

C. 4

4

D. 5

5

33 Look at these numbers: 2, 5, 7, 3. Which is the biggest?

A. 5

5

B. 7

7

C. 3

3

D. 2

2

34 What number comes right after 19?

A. 18

18

B. 19

19

C. 21

21

D. 20

20

35 What number comes right before 14?

A. 12

12

B. 13

13

C. 11

11

D. 15

15

36 Let's count: 7, 8, 9, ..., 11. What number is missing?

A. 1

1

B. 10

10

C. 12

12

D. 9

9



37 Count the teddy bears. How many?

A. 3

3

B. 4

4

C. 6

6

D. 5

5



38 Count the books. How many?

A. 9

9

B. 8

8

C. 11

11

D. 10

10



39 What is 4 plus 4?

A. 8

8

B. 9

9

C. 7

7

D. 6

6

40 Which number is missing? 4, 5, \_, 7

A. 3

3

B. 6

6

C. 8

8

D. 5

5

41 Count the ducks. How many?

A. 4

4

B. 3


3

C. 5

5

D. 6

6



42 On a clock, which hand is the long one?

A. Small Hand

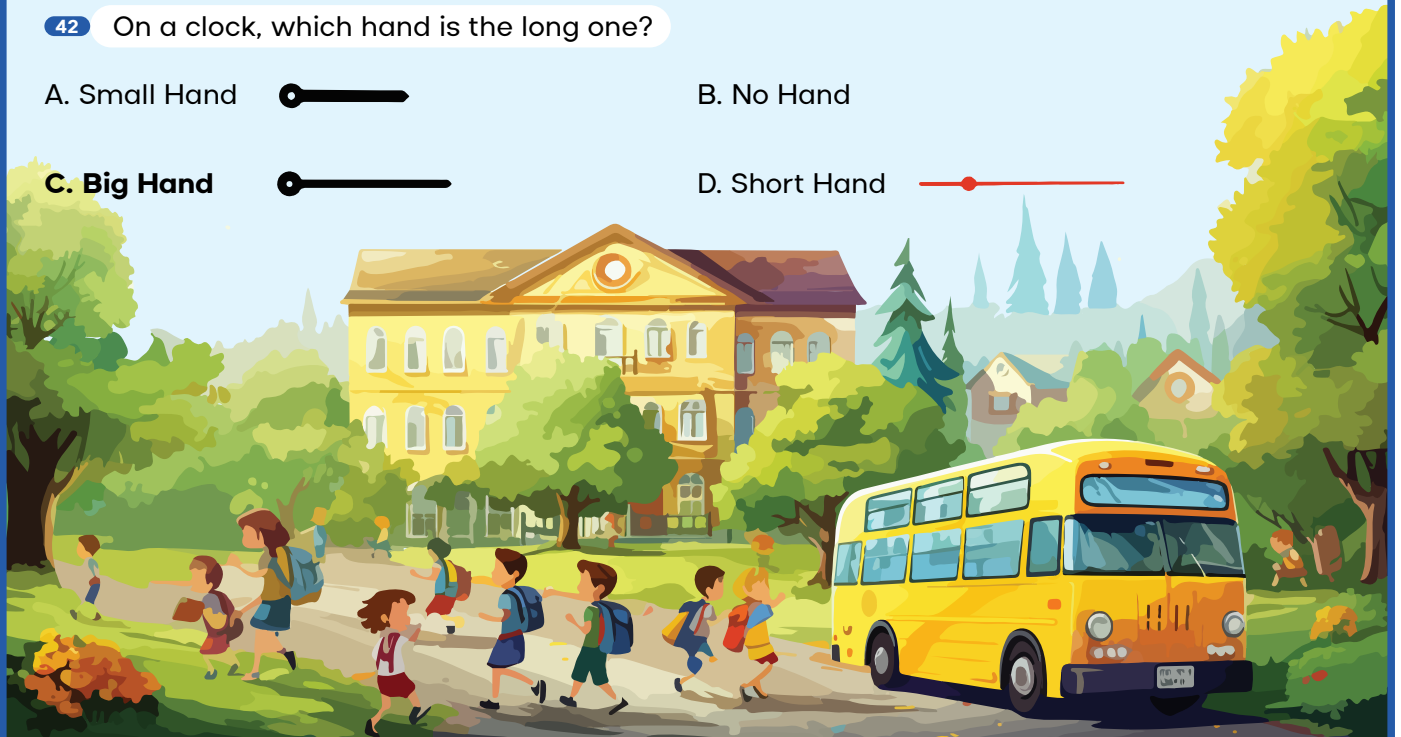



B. No Hand

C. Big Hand



D. Short Hand





43 Which one is taller?

A. Dog



C. Cat



B. Giraffe



D. Rabbit



44 Which number is bigger?

A. 2

2

C. 3

3

B. 4

4

D. 1

1

45 Count the birds. How many?

A. 2

2

C. 6


6

B. 3

3

D. 5

5



46 Which one is heavier?

A. Cat



C. Dog



B. Elephant



D. Rabbit



47 Count the balloons. How many?

A. 4

4

C. 6

6

B. 5

5

D. 7

7



48 Which shape has pointy corners but no curved lines?

A. Circle



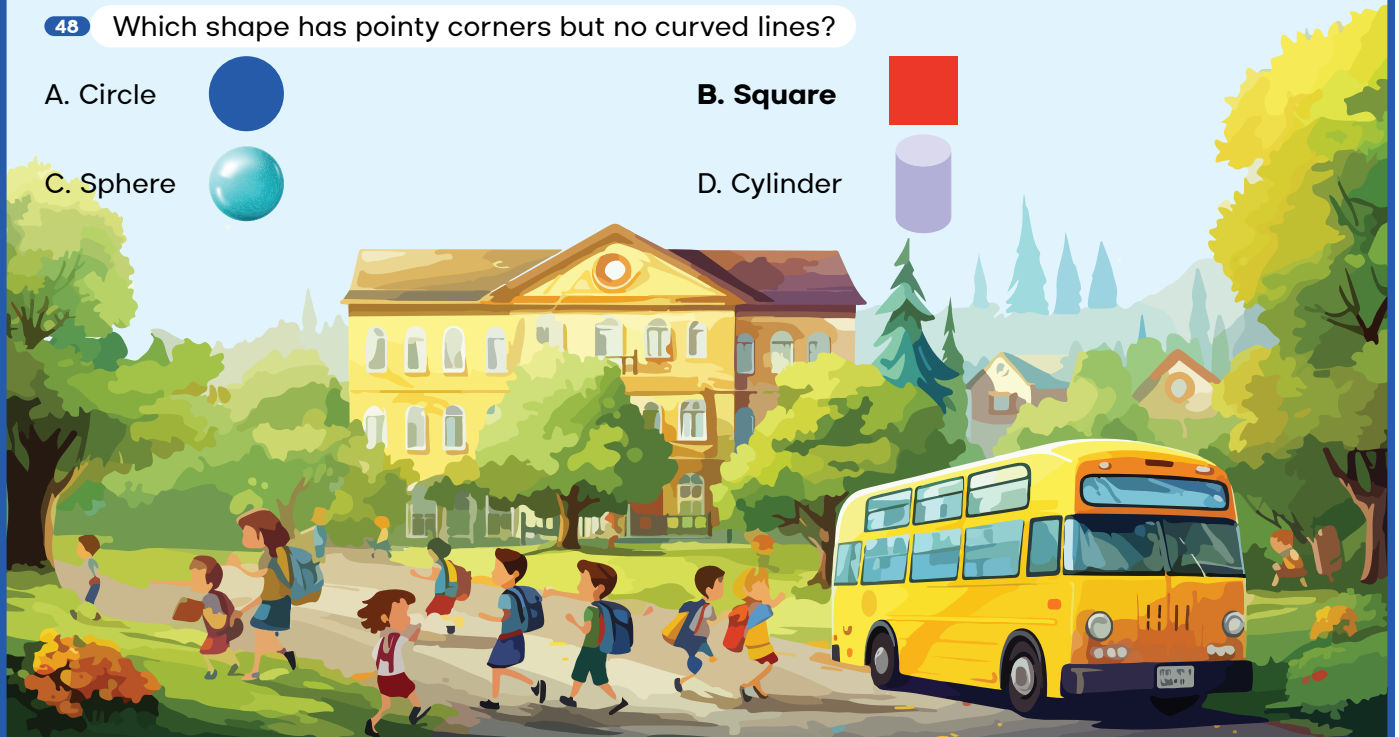
B. Square



C. Sphere



D. Cylinder





49 There are 7 apples. Sara eats 2. How many apples are left?

A. 5

5

B. 6

6

C. 4

4

D. 3

3

50 Which can hold the most water?

A. Cup



B. Bottle



C. Bucket



D. Spoon



51 Count the apples. How many?

A. 2

2

B. 3

3

C. 4

4

D. 5

5



52 Count the rabbits. How many?

A. 7

7

B. 5


5

C. 6

6

D. 8

8



53 Look at these numbers: 5, 2, 9, 7. Which is the smallest?

A. 5

5

B. 2

2

C. 7

7

D. 9

9

54 Which one is lighter?

A. Feather



B. Stone



C. Wood



D. Book





55 Count the strawberries. How many?

A. 6

6

B. 5


5

C. 7

7

D. 4

4



56 Point to the shape that is round with no sides.

A. Circle




B. Triangle



C. Square



D. Rectangle



57 There are 9 ducks. If 3 ducks swim away, how many are left?

A. 7

7

B. 5

5

C. 6

6

D. 4

4

58 Look at these numbers: 3, 8, 6, 4. Which is the biggest?

A. 3

3

B. 6

6

C. 8

8

D. 4

4

59 A bus has 10 seats. If 7 seats have people, how many seats are empty?

A. 5

5

B. 2

2

C. 3

3

D. 4

4

60 What is 8 take away 7?

A. 4

4

B. 2

2

C. 1

1



D. 3



3






61 Count the trees. How many?

- A. 7   
C. 6 

- B. 8   
D. 9 







62 Which one is longer?

- A. Car   
C. Bus 



- B. Train   
D. Bike 

63 Which shape can you roll?

- A. Cube   
C. Rectangle 

- B. Square   
D. Sphere 

64 What number comes right after 6?

- A. 7   
C. 8 

- B. 5   
D. 9 

65 This cake has 3 candles. How old is the child?

- A. 2   
C. 4 

- B. 3   
D. 5 

66 Which number is smaller?

- A. 6   
C. 7 

- B. 9   
D. 8 





67 Count the dogs. How many?

A. 11

11

B. 9


9

C. 5

5

D. 12

12



68 Ali has 10 balloons. If 4 balloons fly away, how many does he have left?

A. 5

5

B. 6

6

C. 7

7

D. 8

8

69 An egg carton has 12 eggs. Is that 1 dozen or 2 dozen?

A. 6

6

B. 24

24

C. 1

1

D. 2

2

70 Which shape looks like an ice cream cone?

A. Cube



B. Cylinder



C. Cone



D. Sphere



71 What number comes right before 9?

A. 10

10

B. 8

8

C. 7

7

D. 6

6

72 Count the fish. How many?

A. 6

6

B. 8


8

C. 7

7

D. 9

9





73 Which one is usually bigger?

A. Ball



C. Balloon

B. Sun



D. Apple

74 What is 9 take away 3?

A. 5

5

B. 6

6

C. 7

7

D. 4

4

75 Count the stars. How many?

A. 4

4

B. 5

5

C. 6

6

D. 7

7



76 Point to the shape that has 4 equal sides.


A. Triangle



B. Square



C. Rectangle



D. Circle



77 Which shape is a circle?

A. Square



B. Triangle



C. Circle



D. Rectangle



78 Count the cats. How many?

A. 3

3

B. 2

2

C. 4

4

D. 5

5





## THE EDUCATE ELEVATE HUB

Office No. 37, P-I, IT Tower,  
Main Boulevard Gulberg III Lahore.  
Contact No: 042-37824225, 37824226

[info@theeducateelevatehub.com](mailto:info@theeducateelevatehub.com)  
[www.theeducateelevatehub.com](http://www.theeducateelevatehub.com)