





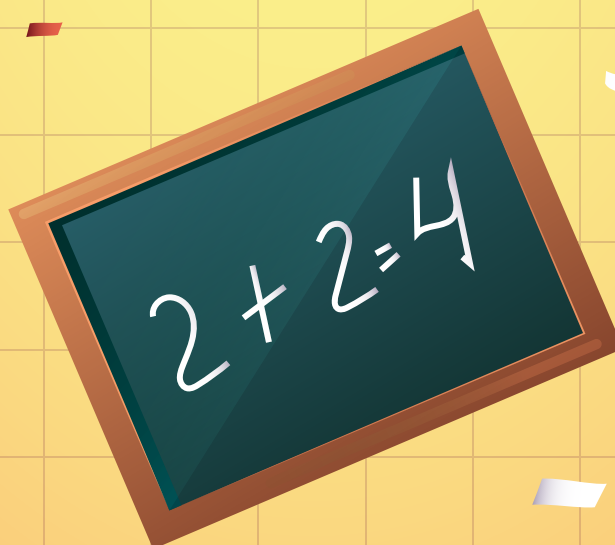

THE EDUCATE®
ELEVATE HUB



MATHS

QUIZ 2025

Grade 01-02



www.theeducateelevatehub.com



+92 300 1556991



Q. 1 What day comes after Monday?

- A. Sunday
C. Tuesday

- B. Wednesday
D. Friday

Q. 2 I am 2 less than 15. What am I?

- A. 12
C. 14

- B. 13**
D. 15

Q. 3 What is the shape of a dice?

- A. Cylinder
C. Sphere

- B. Cube**
D. Cone

Q. 4 I am a shape like a dice. What am I?

- A. Sphere
C. Cube

- B. Cone
D. Cylinder

Q. 5 I am the number between 49 and 51. What am I?

- A. 49
C. 51

- B. 50**
D. 52

Q. 6 Is the number 8 odd or even?

- A. Odd
C. Prime

- B. Even**
D. Zero

Q. 7 Which shape is 3-D?

- A. Square
C. Triangle

- B. Cube**
D. Rectangle

Q. 8 What is the place value of 5 in 52?

- A. 5
C. 500

- B. 50**
D. 15

Q. 9 I am 1 less than 20. What am I?

- A. 18
C. 20

- B. 19**
D. 21

Q. 10 What is the place value of 2 in 123?

- A. 2
C. 200

- B. 20**
D. 23

Q. 11 What is the shape of a book?

- A. Circle
C. Triangle

- B. Rectangle**
D. Cube

**Q. 12** I am the day before Tuesday. What am I?

- A. Wednesday
C. Sunday

- B. Monday**
D. Thursday

Q. 13 How many sides does a square have?

- A. 3
C. 5

- B. 4**
D. 2

Q. 14 Is the number 10 odd or even?

- A. Odd
C. Prime

- B. Even**
D. Zero

Q. 15 How many sides does a rectangle have?

- A. 2
C. 3

- B. 4**
D. 5

Q. 16 I am the first month of the year. What am I?

- A. February
C. March

- B. January**
D. December

Q. 17 What number comes before 70?

- A. 60
C. 71

- B. 69**
D. 68

Q. 18 What number comes after 0?

- A. 2
C. 3

- B. 1**
D. 4

Q. 19 What is the shape of a ball?

- A. Cube
C. Cylinder

- B. Sphere**
D. Cone

Q. 20 I am the day after Friday. What am I?

- A. Sunday
C. Monday

- B. Saturday**
D. Tuesday

Q. 21 At 3 o'clock, where is the minute hand?

- A. 12**
C. 6

- B. 3
D. 9

Q. 22 Is the number 9 odd or even?

- A. Even
C. Prime

- B. Odd**
D. Zero



Q. 23 I am the shape of a ball. What am I?

A. Cone

B. Cube

C. Sphere

D. Cylinder

Q. 24 I am 3 more than 6. What am I?

A. 8

B. 9

C. 10

D. 11

Q. 25 How many corners does a square have?

A. 2

B. 3

C. 4

D. 5

Q. 26 I am a shape with no corners. What am I?

A. Triangle

B. Square

C. Circle

D. Rectangle

Q. 27 What number comes right before 10?

A. 9

B. 8

C. 7

D. 11

Q. 28 How many months have 31 days?

A. 6

B. 7

C. 5

D. 8

Q. 29 What is the value of 8 tens?

A. 8

B. 80

C. 800

D. 18

Q. 30 Which number is smaller?

A. 7

B. 2

C. 6

D. 4

Q. 31 What is 10 minus 4?

A. 5

B. 6

C. 7

D. 8

Q. 32 How many corners does a triangle have?

A. 3

B. 4

C. 5

D. 2

Q. 33 I am the number of hours in half a day. What am I?

A. 6

B. 12

C. 24

D. 18

**Q. 34** What is the shape of a can?

- A. Cube
C. Sphere

- B. Cylinder**
D. Cone

Q. 35 I am the largest 1-digit number. What am I?

- A. 8
C. 7

- B. 9**
D. 6

Q. 36 Which number is even?

- A. 4**
C. 5

- B. 3
D. 7

Q. 37 What is the place value of 4 in 546?

- A. 4
C. 400

- B. 40**
D. 46

Q. 38 How many sides does a triangle have?

- A. 2
C. 4

- B. 3**
D. 5

Q. 39 What is true about the number 1?

- A. Odd
C. Neither prime nor composite

- B. Even
D. Zero

Q. 40 How many hours are in one day?

- A. 12
C. 24

- B. 18
D. 36

Q. 41 What number comes after 99?

- A. 98
C. 101

- B. 100**
D. 102

Q. 42 I am 10 more than 30. What am I?

- A. 35
C. 45

- B. 40**
D. 50

Q. 43 Which number is the largest?

- A. 7
C. 10

- B. 9
D. 8

Q. 44 What is the value of 3 tens?

- A. 3
C. 300

- B. 30**
D. 13



Q. 45 What number comes before 1?

- A. 0
C. 3
B. 2
D. 4

Q. 46 Which number is odd?

- A. 8
C. 7
B. 4
D. 6

Q. 47 What is 5 plus 3?

- A. 7
C. 9
B. 8
D. 10

Q. 48 What is the shape of a pizza slice?

- A. Square
C. Circle
B. Triangle
D. Rectangle

Q. 49 How many days are in one week?

- A. 5
C. 7
B. 6
D. 8

Q. 50 How many months are in one year?

- A. 10
C. 11
B. 12
D. 9

Q. 51 What number comes before 15?

- A. 13
C. 16
B. 14
D. 12

Q. 52 At 9:30, where is the hour hand?

- A. 8 and 9
C. 10 and 11
B. 9 and 10
D. 9 and 11

Q. 53 How many sides does a pentagon have?

- A. 4
C. 6
B. 5
D. 3

Q. 54 How many days are in June?

- A. 30
C. 28
B. 31
D. 29

Q. 55 I have 3 sides and 3 corners. What shape am I?

- A. Square
C. Circle
B. Triangle
D. Rectangle

**Q. 56** Which number is the smallest?

- | | |
|------|------|
| A. 3 | B. 5 |
| C. 1 | D. 2 |

Q. 57 Which number is even?

- | | |
|-------|-------|
| A. 11 | B. 12 |
| C. 13 | D. 15 |

Q. 58 What is the smallest two-digit number?

- | | |
|-------|-------|
| A. 20 | B. 30 |
| C. 10 | D. 11 |

Q. 59 Which is the smallest odd number?

- | | |
|------|------|
| A. 1 | B. 3 |
| C. 5 | D. 7 |

Q. 60 What number comes right after 5?

- | | |
|------|------|
| A. 4 | B. 6 |
| C. 7 | D. 8 |

Q. 61 How many minutes are in one hour?

- | | |
|-------|--------|
| A. 30 | B. 60 |
| C. 90 | D. 120 |

Q. 62 What is the place value of 7 in 374?

- | | |
|--------|-------|
| A. 7 | B. 70 |
| C. 700 | D. 74 |

Q. 63 What is the shape of a birthday hat?

- | | |
|-----------|-------------|
| A. Cube | B. Cone |
| C. Sphere | D. Cylinder |

Q. 64 Is the number 100 odd or even?

- | | |
|----------|-------------|
| A. Odd | B. Even |
| C. Prime | D. Smallest |

Q. 65 I am the number of sides in a rectangle. What am I?

- | | |
|------|------|
| A. 2 | B. 3 |
| C. 4 | D. 5 |

Q. 66 What is the shape of a wheel?

- | | |
|-------------|--------------|
| A. Square | B. Circle |
| C. Triangle | D. Rectangle |



Q. 67 How many days are in one week?

- | | |
|------|------|
| A. 5 | B. 6 |
| C. 7 | D. 8 |

Q. 68 What is the value of 2 tens?

- | | |
|--------|-------|
| A. 2 | B. 20 |
| C. 200 | D. 12 |

Q. 69 What is the value of 5 tens?

- | | |
|--------|-------|
| A. 5 | B. 50 |
| C. 500 | D. 15 |

Q. 70 I am the number of fingers on both hands. What am I?

- | | |
|------|-------|
| A. 5 | B. 10 |
| C. 8 | D. 12 |

Q. 71 I am the smallest even number. What am I?

- | | |
|------|------|
| A. 1 | B. 2 |
| C. 3 | D. 4 |

Q. 72 Which number is the largest?

- | | |
|-------|-------|
| A. 15 | B. 20 |
| C. 25 | D. 10 |

Q. 73 How many seconds are in one minute?

- | | |
|-------|-------|
| A. 50 | B. 60 |
| C. 70 | D. 80 |

Q. 74 What is the value of 1 hundred?

- | | |
|--------|---------|
| A. 1 | B. 10 |
| C. 100 | D. 1000 |

Q. 75 Which number is greater?

- | | |
|------|------|
| A. 5 | B. 9 |
| C. 8 | D. 7 |

Q. 76 I have 4 equal sides. What shape am I?

- | | |
|--------------|-----------|
| A. Rectangle | B. Square |
| C. Triangle | D. Circle |

Q. 77 Which number is the smallest?

- | | |
|------|------|
| A. 8 | B. 6 |
| C. 4 | D. 5 |

Q. 78 How many equal sides does a square have?

- | | |
|------|------|
| A. 2 | B. 3 |
| C. 4 | D. 0 |



Q. 79 I am the number between 6 and 8. What am I?

- | | |
|------|------|
| A. 5 | B. 7 |
| C. 8 | D. 9 |

Q. 80 What is the shape of a door?

- | | |
|-------------|--------------|
| A. Circle | B. Rectangle |
| C. Triangle | D. Sphere |

Q. 81 How many minutes are in half an hour?

- | | |
|-------|-------|
| A. 15 | B. 30 |
| C. 45 | D. 60 |

Q. 82 Which shape has no corners?

- | | |
|-------------|--------------|
| A. Square | B. Circle |
| C. Triangle | D. Rectangle |

Q. 83 I am the shape of an ice cream cone. What am I?

- | | |
|-----------|-------------|
| A. Sphere | B. Cone |
| C. Cube | D. Cylinder |

Q. 84 Which number is greater?

- | | |
|-------|-------|
| A. 18 | B. 20 |
| C. 15 | D. 19 |

Q. 85 What number comes after 49?

- | | |
|-------|-------|
| A. 50 | B. 48 |
| C. 51 | D. 52 |

Q. 86 How many days are in February in a leap year?

- | | |
|-------|-------|
| A. 28 | B. 29 |
| C. 30 | D. 27 |

Q. 87 What number comes after 19?

- | | |
|-------|-------|
| A. 18 | B. 20 |
| C. 21 | D. 22 |

Q. 88 Which number is the smallest?

- | | |
|-------|-------|
| A. 50 | B. 25 |
| C. 10 | D. 5 |

Q. 89 What is the value of 6 hundreds?

- | | |
|--------|---------|
| A. 6 | B. 60 |
| C. 600 | D. 6000 |

Q. 90 What does the short hand on a clock show?

- | | |
|------------|----------|
| A. Minutes | B. Hours |
| C. Seconds | D. Days |



THE EDUCATE ELEVATE HUB

Office No. 37, P-I, IT Tower,
Main Boulevard Gulberg III Lahore.
Contact No: 042-37824225, 37824226

info@theeducateelevatehub.com
www.theeducateelevatehub.com